


**SOF INTERNATIONAL GENERAL  
KNOWLEDGE OLYMPIAD  
2022-23**



**DO NOT OPEN THIS BOOKLET UNTIL ASKED TO DO SO**

Total Questions: 35 | Time: 1 hr.

**Guidelines for the Candidate**

1. You will get additional ten minutes to fill up information about yourself on the OMR Sheet, before the start of the exam.
2. Write your **Name, School Code, Class, Roll No.** and **Mobile Number** clearly on the **OMR Sheet** and do not forget to sign it. We will share your marks / result and other information related to SOF exams on your mobile number.
3. The Question Paper comprises four sections:  
**General Awareness** (20 Questions), **Current Affairs** (5 Questions), **Life Skills** (5 Questions) and **Achievers Section** (5 Questions).  
Each question in Achievers Section carries 2 marks, whereas all other questions carry one mark each.
4. All questions are compulsory. There is no negative marking. Use of calculator is not permitted.
5. There is only ONE correct answer. Choose only ONE option for an answer.
6. To mark your choice of answers by darkening the circles on the OMR Sheet, use **HB Pencil** or **Blue / Black ball point pen** only. E.g.  
**Q.10: What would you keep in an aquarium?**  
A. Cats    B. Dogs    C. Fish    D. Cows  
As the correct answer is option C, you must darken the circle corresponding to option C on the OMR Sheet.
7. Rough work should be done in the blank space provided in this booklet.
8. Return the OMR Sheet to the invigilator at the end of the exam.
9. Please fill in your personal details in the space provided on this page before attempting the paper.

10. (A) (B) (C) (D)



SCIENCE OLYMPIAD FOUNDATION  
Inspiring Young Minds Through Knowledge Olympiads




Name:.....


SOF Olympiad Roll No.:..... Contact No.:.....

## GENERAL AWARENESS

1. Which of the following is a digestive juice secreted by our body?  
A. Blood  
B. Plasma  
C. Saliva  
D. Lymph
2. A type of food preservation method that involves sealing food in an airtight container which is then sterilised is called \_\_\_\_\_.  
A. Dehydration  
B. Freezing  
C. Canning  
D. Fermentation
3. Which of the following instruments is used to record our heart's electrical activity?  
A. Sphygmomanometer  
B. Nebulizer  
C. Electrocardiograph  
D. Thermometer
4. The stick insect looks like a stick. This is an example of \_\_\_\_\_.




- A. Migration  
B. Mimicry  
C. Hibernation  
D. Aestivation
5. What kind of plant is pondweed?  
A. Aquatic plant  
B. Mangrove plant  
C. Mountainous plant  
D. Desert plant
6. The flag shown in the given picture belongs to



- A. Mauritius  
B. Canada  
C. Bhutan  
D. Cambodia.

7. The given picture shows the famous Buddhist temple of Borobudur. In which country is it located?



- A. Indonesia  
B. Japan  
C. Malaysia  
D. China

8. The person shown in the picture was a social rights activist, politician and the first black President of South Africa. Identify him.



- A. Barack Obama  
B. Nelson Mandela  
C. John F. Kennedy  
D. Kofi Annan

9. Hariprasad Chaurasia is a very popular and eminent artist. Which of the following musical instruments is he associated with?



10. Which of the following instruments is used to view objects above the water surface in submarines?

- A. Endoscope  
B. Periscope  
C. Electroscopes  
D. Radar

11. Which of the following gases is used to prepare the fizz of soft drinks?

- A. Oxygen  
B. Nitrogen  
C. Hydrogen  
D. Carbon dioxide

12. Which of the following options helps you to browse the internet?



- D. All of these

13. Which of the following is NOT an example of precipitation?

- A. Rain
- B. Clouds
- C. Sleet
- D. Snow

14. Sewage water can be treated with the help of

- A. Insecticides
- B. Microorganisms
- C. Detergents
- D. Pesticides.

15. Which of the following is causing damage to the famous monument 'Taj Mahal' situated in Agra?

- A. Greenhouse effect
- B. Acid rain
- C. Soil erosion
- D. Afforestation

16. The idiom 'give someone the cold shoulder' means

- A. To be patient
- B. To intentionally ignore someone
- C. To put a project on hold
- D. To spoil something.

17. Who is the author of 'Oliver Twist'?

- A. Charles Dickens
- B. J. K. Rowling
- C. Lewis Carroll
- D. Anna Sewell

18. \_\_\_\_\_ is the traditional embroidery of Punjab.

- A. Kashida
- B. Chikankari
- C. Phulkari
- D. Zardozi

19. Ravi Kumar Dahiya received the Major Dhyan Chand Khel Ratna Award in 2021. With which sport is he associated?

- A. Athletics
- B. Boxing
- C. Wrestling
- D. Hockey



20. The codes for some letters are given below.

<b>Letters</b>	M	G	A	H	E	K	R	L	T
<b>Codes</b>	•	@	3	#	5	Δ	2	©	4

Find the code of EARTH.

- A. 52@©#
- B. 534#@
- C. 5324#
- D. 34@#•

21. Who among the following has become the first woman cricketer to appear at six cricket World Cups?

A.



Mithali Raj

B.



Smriti Mandhana

C.



Jhulan Goswami

D.



Harmanpreet Kaur

22. Which of the following films won the Best Picture Award at 94<sup>th</sup> Academy Awards held in March 2022?

A. CODA

B. Don't Look Up

C. Dune

D. Belfast

23. Who is the current Lieutenant Governor of Delhi?

A.



Arvind Kejriwal

B.



Vinai Kumar Saxena

C.



Amit Shah

D. None of these

24. What was the theme of World Health Day 2022?

A. Our Planet, Our Health

B. Universal Health Coverage

C. Support Nurses and Midwives

D. Depression, Let's Talk

25. Latest Indian ₹ 10 denomination banknote has the motif of \_\_\_\_\_ on the reverse.

A. Lotus Temple, New Delhi

B. Sun Temple, Konark

C. Taj Mahal, Agra

D. Red Fort, New Delhi

26. What should you do if some dirt gets into your eyes?
- A. Wash your hands and flush your eyes with water.
  - B. Try to take out the dirt with the help of a toothpick.
  - C. Rub your eyes.
  - D. Wash your eyes with soap water.
- 
27. Which of the following is an example of bad sportsmanship?
- A. Committing a foul on purpose
  - B. Shaking hands with your opponent team
  - C. Honestly following the rules of the game
  - D. Respecting the referee's decision
- 
28. You are playing an indoor game with your friends and notice that one of them starts saying mean things to your best friend. What should you do?
- A. Leave the game
  - B. Start saying mean things to that player
  - C. Try to make him/her understand not to do so
  - D. Ignore him/her and keep playing
- 
29. If you get bitten by a stray dog, what should you do?
- A. Wash the bitten area with kerosene oil
  - B. Go to a doctor immediately
  - C. Apply some soil on the bitten area
  - D. Nothing, as dog bite is not harmful
- 
30. You have lost your cousin's book. What should you do?
- A. You should admit your mistake and say sorry.
  - B. You should tell your cousin that the book has been torn by you and is in binding.
  - C. You should lie about borrowing the book.
  - D. You should say that you are not returning the book as you like it very much.

31. Select the correct match(es) of country and its currency

Country	Currency
(i) Argentina	- Peso
(ii) Iran	- Rupaya
(iii) Kenya	- Shilling
(iv) Spain	- Dollar

- A. (i) and (iii) only                      B. (iii) only  
 C. (ii), (iii) and (iv) only              D. (ii) and (iv) only

32. Match the columns and select the correct option.

**Column I**

**(Painting)**

- P. Girl with a Pearl Earring  
 Q. The Starry Night  
 R. Guernica  
 S. The Last Supper

**Column II**

**(Painter)**

- (i) Pablo Picasso  
 (ii) Johannes Vermeer  
 (iii) Vincent van Gogh  
 (iv) Leonardo da Vinci


- A. P-(iv), Q-(ii), R-(iii), S-(i)  
 B. P-(iii), Q-(iv), R-(i), S-(ii)  
 C. P-(ii), Q-(iv), R-(iii), S-(i)  
 D. P-(ii), Q-(iii), R-(i), S-(iv)

33. Select the correct statement(s).

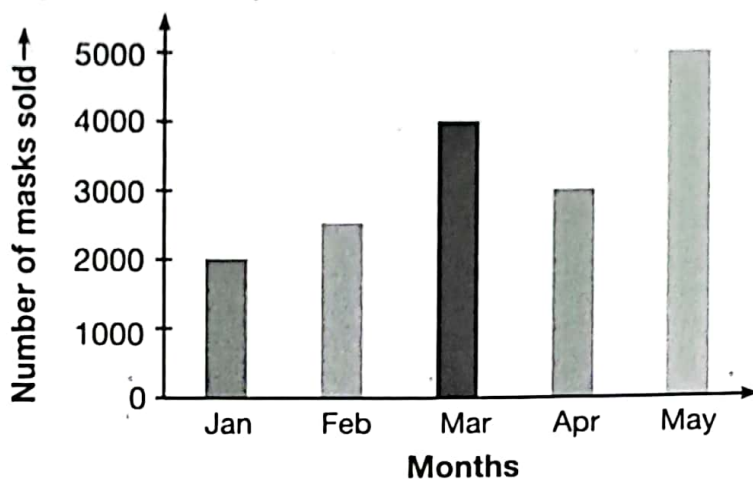
- (i) The Olympic Flag was first flown in 1920 Games.  
 (ii) The First Winter Olympics were held in 1924.  
 (iii) The United States has hosted the Summer Olympics four times.

- A. (i) and (iii) only                      B. (ii) and (iii) only  
 C. (iii) only                                D. (i), (ii) and (iii)

34. Which of the following devices converts images from documents into digital form?



35. The given bar graph shows the number of masks sold by a shopkeeper during five months. Study the graph carefully and answer the following questions.



- (i) How many more masks were sold in the month of March than in January?  
 (ii) How many total masks were sold during the months of February, April and May together?

(i)	(ii)
A. 2000	11000
B. 1500	8500
C. 2500	9000
D. 2000	10500

SPACE FOR ROUGH WORK



For latest updates & information, please like our Facebook page ([www.facebook.com/sofworld](http://www.facebook.com/sofworld)) or register on <http://www.sofworld.org/subscribe-updates.html>

For Level 1 and Level 2 preparation material / free sample papers, please log on to [www.mtg.in](http://www.mtg.in)



**National Office:** Plot 99, First Floor, Sector 44 Institutional area, Gurugram -122 003 (HR) India  
 Email: [info@sofworld.org](mailto:info@sofworld.org) | Website: [www.sofworld.org](http://www.sofworld.org)  
 Regd. Office: 406, Taj Apt., Ring Road, New Delhi-110 029  
 Note: Please address all communication to the National Office only.